

Name: \_\_\_\_\_

# Counting Dimes

Count the money. Write the amount.

a.  \_\_\_\_\_ ¢

b.  \_\_\_\_\_ ¢

c. 


d. 

e. 




# Preview


Please log in to download the printable version of this worksheet.


 \_\_\_\_\_ ¢

 \_\_\_\_\_ ¢

 \_\_\_\_\_ ¢

i.  \_\_\_\_\_ ¢

j.  \_\_\_\_\_ ¢

k.  \_\_\_\_\_ ¢

# ANSWER KEY

## Counting Dimes

Count the money. Write the amount.

a.  \_\_\_\_\_ **90** ¢

b.  \_\_\_\_\_ **60** ¢

c. 


d. 


e. 





# Preview


Please log in to download the printable version of this worksheet.


 \_\_\_\_\_ **70** ¢

 \_\_\_\_\_ **60** ¢

 \_\_\_\_\_ **80** ¢

i.  \_\_\_\_\_ **30** ¢

j.  \_\_\_\_\_ **90** ¢

k.  \_\_\_\_\_ **40** ¢